


Fruit Salad within 10

Write down the answers in the circles.


 $+$  $=$ 




 $+$ $=$ 

 $+$  $=$ 

$+$  $=$ 

 $+$  $=$ 

 $+$  $=$ 

 $+$  $=$ 

$+$ $=$ 

 $+$  $=$ 